



KNEUS SCHOLASTIC APTITUDE TEST (KSAT - II)

Syllabus

and

Sample Questions

With a Model Question Paper

CLASS - IV

KNEUS SCHOLASTIC APTITUDE TEST

Students kindly go through the syllabus given and prepare accordingly.

The questions given in this booklet are sample questions. These questions need not appear in the test.

The answer key is given at the end

Both Part A and B are to be attempted compulsorily

SYLLABUS OUTLINE

PART - A Objective Type (General Studies)

- English
- Mathematics
- Science
- Social Studies
- General Knowledge

PART - B (Subjective Type)

- Paragraph Writing

PART A ENGLISH

SYLLABUS

1. Noun
2. Pronoun
3. Verb - Present, Past, Future
4. Adjective
5. Adverb
6. Preposition
7. Conjunction
8. Antonyms and Synonyms

Fill in the blanks with appropriate noun or form of nouns :

1. The.....of whales swam into the deep sea.
(a) school (b) library
(c) class (d) pack
2. The.....of sheep grazed in the meadow.
(a) fleet (b) swarm
(c) flock (d) herd
3. A.....of sailors sailed towards wet.
(a) Crew (b) Army
(c) Crowd (d) Team

4. The dentist pulled out her.....
 (a) tooth (b) tooths
 (c) tooths (d) teeths
5. We visited many.....in Europe.
 (a) citys (b) cities
 (c) city (d) city's
6. My sister had beautiful tiny.....
 (a) foot (b) feets
 (c) foots (d) feet

Select the correct pronoun :

7. It was.....who informed you about the accident.
 (a) her (b) I
 (c) me (d) him
8. By.....has this novel been written ?
 (a) Who (b) whose
 (c) Which (d) whom
9. You are going on a long trip all alone. Please look after.....
 (a) herself (b) himself
 (c) yourself (d) itself
10. Both Mr and Mrs Singh.have painted the entire house.
 (a) herself (b) themself
 (c) ourself (d) themselves
11. Many friends visited.....when he was in the hospital.
 (a) him (b) us
 (c) she (d) his

Fill in the blanks using the correct form of the verb :

12. The train.....early in the morning.
 (a) arriving (b) arrive
 (c) arrived (d) arrival
13. I.....for Paris Tomorrow.
 (a) leaves (b) leaving
 (c) left (d) will be leaving
14. She has.....her work two minutes ago.
 (a) Completes (b) Completing
 (c) Complete (d) Completed
15. Does he.....very hard ?
 (a) works (b) working
 (c) work (d) worked

Fill in the blanks with the correct form of the verb in the present tense :

16. Flowers.....on trees.
(a) bloomed (b) blooms
(c) bloom (d) blooming
17. We.....every evening
(a) playing (b) plays
(c) played (d) play
18. The painter.....the house.
(a) paints (b) paint
(c) painted (d) will paint

Fill in the blanks with the correct form of the verbs.

19. We.....a wonderful picnic last week.
(a) have (b) had
(c) has (d) having
20. The exam.at 10 AM tomorrow.
(a) will start (b) started
(c) has started (d) had started
21. I.....a pretty bag in the super market.
(a) founded (b) had founded
(c) found (d) finding
22. I.....be late for school.
(a) should (b) must
(c) shall (d) would

Select the correct adjective to complete the sentence.

23. I stay on the.....floor in my building.
(a) up (b) upper
(c) uppermost (d) more up
24. Radha came first in the race, so she is.
(a) happier (b) happy
(c) happiest (d) more happy
25. The lion is the.....animal in the animal kingdom.
(a) majestic (b) more majestic
(c) majesticer (d) most majestic

Select the Adverb of time.

26. He wakes upin the morning.
(a) fast (b) sometimes
(c) quickly (d) early

27. His school bus arrived
(a) late (b) sometimes
(c) everytime (d) everywhere
28. Hitler died many years
(a) after (b) ago
(c) early (d) late

Fill in the blanks with the correct preposition.

29. The cat is hiding.....the curtain.
(a) on (b) above
(c) behind (d) down
30. I live.....the school.
(a) between (b) before
(c) beside (d) beneath
31. The children are walking.....the bridge.
(a) on (b) in
(c) across (d) above

Fill in the blanks with the appropriate conjunctions.

32. The school assembly will get cancelled.....it rains.
(a) because (b) when
(c) if (d) or
33. Hurry up.....you will miss your train.
(a) so (b) because
(c) or (d) but
34. Tom managed to reach home..the rain started.
(a) before (b) when
(c) so (d) till

Select the most appropriate phrase to complete the sentence.

35. The exam was very easy, it was a.....
(a) piece of pie (b) piece of cake
(c) cake piece (d) piece of chocolate
36. He worked.....to complete his assignment.
(a) at all minutes (b) at all hours
(c) at all time (d) at all seconds
37. Leena loves chocolate, she has a.....
(a) sweet mouth (b) sweet tongue
(c) sweet tooth (d) sweet lips

Select the correct antonym for the word in capital letter.

38. We heard a story of a GIANT.
(a) Angel (b) Monster
(c) Dwarf (d) Coward

39. Lata has a RARE stamp collection.
 (a) Common (b) Special
 (c) Wonderful (d) Poor
40. The road is very NARROW.
 (a) Long (b) Large
 (c) Wide (d) Big
41. I was AWARE of the incident
 (a) Ignorant (b) certain
 (c) Sure (d) confident

Select the correct Synonym from the following

42. AUGUST
 (a) Common (b) Ridiculous
 (c) Dignified (d) Petty
43. CONSEQUENCES
 (a) Results (b) Series
 (c) Difficulties (d) Conclusions
44. PRESTIGE
 (a) Influence (b) Quality
 (c) Name (d) Wealth
45. BRIEF
 (a) Little (b) Long
 (c) Limited (d) Short

ANSWER - KEY

- | | | | | | | |
|-------|-------|-------|-------|-------|-------|-------|
| 1. c | 2. b | 3. a | 4. c | 5. a | 6. d | 7. b |
| 8. d | 9. c | 10. d | 11. a | 12. c | 13. d | 14. c |
| 15. d | 16. c | 17. d | 18. c | 19. d | 20. a | 21. b |
| 22. a | 23. c | 24. c | 25. c | 26. b | 27. d | 28. d |
| 29. a | 30. b | 31. c | 32. c | 33. c | 34. c | 35. c |
| 36. a | 37. b | 38. b | 39. a | 40. c | 41. c | 42. c |
| 43. a | 44. c | 45. d | | | | |

MATHEMATICS

SYLLABUS

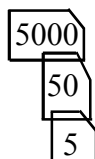
1. Numbers
2. Computation Operations
3. Fractions
4. Money
5. Time
6. Measurement
7. Geometry
8. Pictorial Representation
9. Patterns

1. $5000 + 30 + 8 = \dots\dots\dots$

- (a) 538 (b) 5038
(c) 5308 (d) 50038

2. What number does the picture show.

- (a) 555
(b) 5055
(c) 5505
(d) 5550



3. $9 \square 1000 = 9 \text{ thousands}$

The missing sign is.

- (a) + (b) -
(c) \times (d) \div

4. Which of the following set of numbers are in ascending order :

- (a) 4736, 1504, 392, 746 (b) 6982, 6892, 9864, 5321
(c) 7001, 6002, 5003, 4004 (d) 8041, 8104, 8140, 8410

5. How many three digit numbers can be formed using 6, 8, 0 without repetition.

- (a) 2 (b) 3
(c) 4 (d) 5

6. In numbers from 1 to 200 the digit '0' appears.....times.

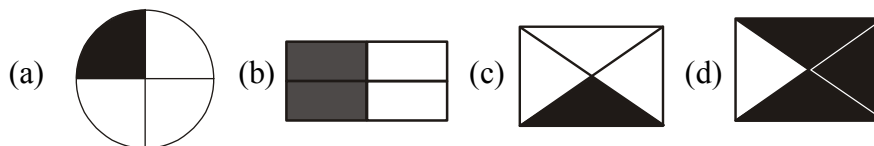
- (a) 30 (b) 31
(c) 38 (d) 9

7. 80004 is same as :

- (a) 80 ten thousands and 4 tens (b) 80 thousands and 4 hundreds
(c) 8 ten thousands and 4 ones (d) 8 ten thousands and 4 tens

8. Nidhi likes the number of the type 345, 678, 456,
Which of the following number does she likes ?
(a) 123 (b) 358
(c) 777 (d) 147
9. Seema packed 144 eggs in 5 boxes. Each box had the same number of eggs. How many eggs were left over ?
(a) 3 (b) 44
(c) 43 (d) 4
10. Number of 1000's, 100's, 10's and ones should be added to get the smallest 4 digit number are.....respectively.
(a) 0, 0, 0 and 1 (b) 1, 1, 1 and 1
(c) 1, 0, 0 and 0 (d) 1, 1, 1 and 8
11. If the smallest one digit natural number is added to a number, we get.
(a) Its successor (b) Its predecessor
(c) Two digit number (d) Can't say
12. In which number sentence does 5 makes the equation true ?
(a) $70 \div \square = 14$ (b) $25 \div \square = 1$
(c) $40 \div \square = 10$ (d) $80 \div \square = 40$
13. $405 \times 100 = 40 \text{ thousands} + \square \text{ hundreds.}$
(a) 5 (b) 50
(c) 500 (d) 4000
14. What number should be added to 999 to give the smallest 4-digit number ?
(a) 1 (b) 2
(c) 3 (d) 1000
15. Which number should be written in the box below to make the number sentence correct ?
 $1830 < 1785 + \square$
(a) 40 (b) 35
(c) 45 (d) 50
16. Which digit is at the hundred's place in the sum of $2890 + 785$?
(a) 2 (b) 6
(c) 7 (d) 5
17. Which one of the following is wrong :
(a) $471 + 804 = 804 + 471$ (b) $47 + 1944 = 1991$
(c) $1987 - 1107 = 1107 - 1987$ (d) $2867 - 37 = 2830$

18. Which two Fractions are same ?



- (a) (a) and (b) (b) (a) and (d)
(c) (a) and (c) (d) (b) and (d)

19. Which of the following fractions is equivalent to $\frac{4}{5}$?

- (a) $\frac{8}{10}$ (b) $\frac{21}{35}$
(c) $\frac{15}{10}$ (d) $\frac{18}{25}$

20. If $\frac{1}{5}$ th part is equal to 4, then $\frac{3}{5}$ th part is equal to.....

- (a) 5 (b) 6
(c) 9 (d) 12


21. What fraction of 88 has 3 at ten's place ?

- (a) $\frac{3}{8}$ (b) $\frac{4}{8}$
(c) $\frac{6}{8}$ (d) $\frac{5}{8}$

22. Which of the following are like fraction :

- (a) $\frac{3}{7}$, $\frac{5}{6}$ (b) $\frac{9}{5}$, $\frac{1}{2}$
(c) $1\frac{1}{2}$, $4\frac{2}{3}$ (d) $\frac{4}{6}$, $\frac{12}{18}$

23. In which groups to exactly $\frac{3}{4}$ of the stars are shaded ?



24. The equivalent fraction of $\frac{5}{7}$ having numerator 20 is :

- (a) $\frac{220}{7}$ (b) $\frac{20}{14}$
(c) $\frac{20}{21}$ (d) $\frac{20}{28}$

25. Which of the following figure is divided into 2 equal parts ?







26. How many Rs. 10 coins will make a sum of Rs. 1000 ?
 (a) 10 (b) 50
 (c) 100 (d) 500
27. Seema bought a suit for Rs. 1,285. She gave three 500 rupees notes to salesman. How many rupees will the salesman return her ?
 (a) Rs. 285 (b) Rs. 315
 (c) Rs. 215 (d) Rs. 785
28. Which Indian Currency note does not exist ?
 (a) Rs. 5 (b) Rs. 10
 (c) Rs. 20 (d) Rs. 25
29. 10 paise is the same as.....
 (a) Rs. 10 (b) Rs. 100
 (c) Rs. 0.01 (d) Rs. 0.10
30. Seventy rupees and five paise = _____
 (a) Rs. 7.05 (b) Rs. 7.50
 (c) Rs. 70.05 (d) Rs. 70.50
31. $\frac{5}{6}$ of a sum of money is Rs. 30. How much is the sum of money ?
 (a) Rs. 25 (b) Rs. 36
 (c) Rs. 150 (d) Rs. 180
32. Seema saved Rs. 90 in 6 days. She saves the same amount everyday. Everyday she saved Rs.
 (a) 15 (b) 64
 (c) 96 (d) 540
33. 20 paise has the same value as.....
 (a) 2 five paise coins (b) 3 five paise coins
 (c) 4 five paise coins (d) 4 ten paise coins
34. When the minute hand is on 10, it means it has covered.....minutes.
 (a) 2 (b) 5
 (c) 10 (d) 50
35. The football match started at 9:30 AM and got over at 5:10 PM. How long was that :
 (a) 4 hours 20 minutes (b) 14 hours 40 minutes
 (c) 7 hours 40 minutes (d) None of these
36. When the time is a quarter past the hour the minute hand is always on :
 (a) 3 (b) 9
 (c) 6 (d) 12

37. Which one of the following shows the longest period ?
 (a) 200 minutes (b) 10 days
 (c) 1 week 2 days (d) 24 hours
38. 15 minutes before 12:00 noon is :
 (a) 12.15 PM (b) 11.45 PM
 (c) 11.45 AM (d) None of these
39. 1 hour 15 minutes is same as :
 (a) 75 minutes (b) 85 minutes
 (c) 115 minutes (d) 40 minutes
40. Convert 270 minutes into hours and minutes :
 (a) 4 hours 30 minutes (b) 4 hours 20 minutes
 (c) 2 hours 70 minutes (d) 4 hours 40 minutes
41. $1\frac{3}{4}$ hours =minutes ?
 (a) 63 (b) 13
 (c) 175 (d) 105
42. Add 140 m 23 cm and 79 m 56 cm :
 (a) 219 m 70 cm (b) 270 m 19 cm
 (c) 200 m (d) 219 m 79 cm
43. A piece of blue string is 2 m 65 cm long. A piece of pink string is 3 m longer. The pink string is.....long.
 (a) 35 cm (b) 2 m 68 cm
 (c) 2 m 95 cm (d) 5 m 65 cm
44. Which one of the following is wrong :
 (a) 7000 g = 7 kg (b) 2 kg = 1900 g + 100 g
 (c) 1 kg = 1000 g (d) 3 kg 30 g = 3300 g
45. Which one of the following is not a prime number?
 (a) 31 (b) 61
 (c) 71 (d) 91
46. If 2 jars can hold 10 liters of water, then 5 such jars can hold.....litres of water ?
 (a) 20 (b) 24
 (c) 25 (d) 26
47. How much more is to be added to 350 g to make it equal to 1 kg ?
 (a) 550 g (b) 650 g
 (c) 250 g (d) 350 g
48. A book shelf measures 5 meters in length. If it is divided into 5 sections of equal length. What is the length of each Section ?
 (a) 1 meter (b) 2 meters
 (c) 3 meters (d) None of these

49. Which tool would be needed to measure the temperature of the body ?

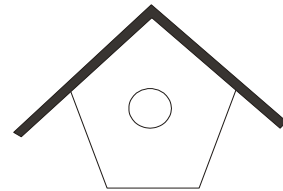
- (a) Thermometer (b) Scale
(c) Meter Rod (d) Clock

50. Which of these simple closed figure is also a polygon ?


- (a)  (b) 
(c)  (d) 

51. What shape is the piece of wood that was cut out to make the bird house ?

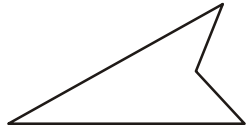
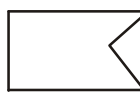
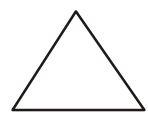

- (a) Circle (b) Pentagon
(c) Triangle (d) Diamond



52. Which shape is divided into two identical equal parts by the dotted line ?

- (a)  (b) 
(c)  (d) 

53. Which of the following figure has three vertices ?

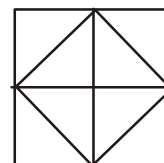
- (a)  (b) 
(c)  (d) 

54. A figure with 4 equal sides and 4 equal angles is called a.....

- (a) Circle (b) Rectangle
(c) Square (d) triangle

55. How many squares are there in the given figure ?

- (a) 5 (b) 4
(c) 6 (d) 3



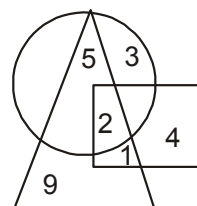
56. What are the numbers that lie inside any two figures ?

(a) 2, 1

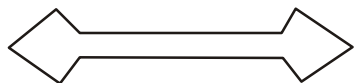
(b) 5, 1

(c) 5, 9

(d) 9, 1



57. How many line segments does the figure has.



(a) 12

(b) 13

(c) 10

(d) 9

58. Which one of the following statements is wrong ?

(a) A square has 4 corners

(b) A triangle has 3 sides

(c) A semi circle has 1 line segment

(d) A triangle has always equal sides

59. Find out the wrong number in the sequence :

22, 33, 66, 99, 121, 279, 594

(a) 33

(b) 121

(c) 279

(d) 594

60. Find the missing number :

5, 7, 11,, 35, 67

(a) 19

(b) 15

(c) 17

(d) 27


61. Find the value of B.

(a) 42

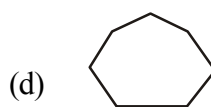
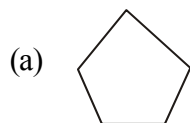
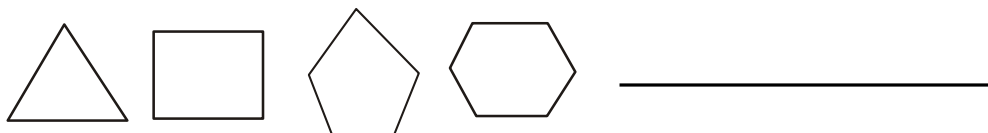
(b) 54

(c) 44

(d) 48



62. What is the next figure in the patterns :



63. Find the missing numbers :

8, 24, 12, 36, 18, 54,

(a) 26

(b) 108

(c) 68

(d) 72

64. What comes next.



(a)

(b)

(c)

(d)

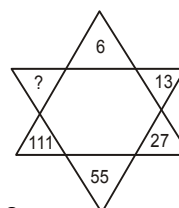
65. Find the missing number by observing the pattern :

(a) 222

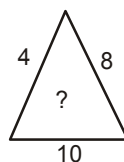
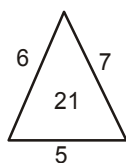
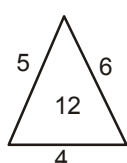
(b) 221

(c) 223

(d) 224



66. Find the missing number from among the given alternatives ?



(a) 22

(b) 30

(c) 32

(d) 34

67. Suman wants to paste 15 stamps on her paper. Which is the way that she can paste these stamps on her paper ?

(a) 3 rows of 5 stamps

(b) 3 rows of 4 stamps

(c) 4 rows of 5 stamps

(d) None of these

Q. Nos. 68 to 71

The number of toys produced in the four weeks of October are given below :

First Week	*	*	*	*		
Second Week	*	*	*	*	*	
Third Week	*	*	*	*	*	*
Fourth Week	*	*				

Each * represents 500 toys.

68. In which week were the maximum number of toys produced ?

(a) First

(b) Second

(c) Third

(d) Fourth


69. In which week were the least number of toys produced ?
 (a) First (b) Second
 (c) Third (d) Fourth
70. How many toys were produced in the third week ?
 (a) 3000 (b) 2500
 (c) 3500 (d) 1000
71. What is the total number of toys produced in October ?
 (a) 4500 (b) 3000
 (c) 8500 (d) 5000

Q. Nos. 72 to 75

The line plot given below shows the number of books of different subjects in a school library.

Books in Library

X X = 50 Books



Science	Maths	Hindi	Fiction	Comic	English
---------	-------	-------	---------	-------	---------

72. How many books on Maths are available in the library ?
 (a) 400 (b) 350
 (c) 300 (d) 250
73. Which subject has the least number of books ?
 (a) English (b) Comics
 (c) Fiction (d) Hindi
74. How many more books were on Science than on English ?
 (a) 100 (b) 5
 (c) 10 (d) 50
75. What is total number of books in the library ?
 (a) 1350 (b) 1400
 (c) 1450 (d) 1500

ANSWER - KEY

1.	b	2.	b	3.	c	4.	d	5.	c	6.	b	7.	c
8.	a	9.	d	10.	c	11.	a	12.	a	13.	a	14.	a
15.	d	16.	b	17.	c	18.	c	19.	a	20.	d	21.	a
22.	d	23.	a	24.	d	25.	a	26.	c	27.	c	28.	d
29.	d	30.	c	31.	b	32.	a	33.	c	34.	d	35.	c
36.	a	37.	b	38.	c	39.	a	40.	a	41.	d	42.	d
43.	d	44.	d	45.	d	46.	c	47.	b	48.	a	49.	a
50.	d	51.	b	52.	a	53.	c	54.	c	55.	c	56.	b
57.	c	58.	d	59.	c	60.	a	61.	a	62.	d	63.	a
64.	d	65.	c	66.	c	67.	a	68.	c	69.	d	70.	a
71.	c	72.	c	73.	b	74.	a	75.	a				

SCIENCE

SYLLABUS

I. The Living World

II. The Human Body and its needs

III. Properties of Material

(a) Measurement

(b) Light Sound and Force

(c) Material Around Us

IV. Heavenly Bodies

V. Environment

1. Animals that give birth to young ones and feed them with their milk are called :

(a) Birds

(b) Mammals

(c) Reptiles

(d) Insects

2. A parrot has a :

(a) curved scoop like beak

(b) short, hard and horny beak

(c) broad and short beak

(d) all of these

3. Animals that gnaw their food are :

(a) lion and tiger

(b) cow and dog

(c) rat and squirrel

(d) Giraffe and cow

4. In a potato plant extra food is stored in :

(a) leaves

(b) Root

(c) Underground stem

(d) Branches

5. Nose, lungs, gills, skin or all holes are organs of :
 - (a) Breathing
 - (b) Reproduction
 - (c) Excretion
 - (d) Digestion
6. The long winter sleep of some cold blooded animals is called :
 - (a) Hibernation
 - (b) Aestivation
 - (c) Respiration
 - (d) Regeneration
7. The ability to merge with surroundings is called as :
 - (a) Adaptation
 - (b) Camouflage
 - (c) Metamorphosis
 - (d) Migration
8. Which of the following features does not help a bird to fly ?
 - (a) Boat shaped body
 - (b) hollow and light bird
 - (c) Strong beak
 - (d) Wings
9. The tiny plant inside a seed is called :
 - (a) Embryo
 - (b) Seedling
 - (c) Seedcoat
 - (d) Cotyledon
10. The plant of pumpkin is categorized as :
 - (a) herb
 - (b) shrub
 - (c) trees
 - (d) creeper
11. The skull protects :
 - (a) eyes
 - (b) brain
 - (c) ears
 - (d) none of these
12. Ribs protect the :
 - (a) Lungs and Heart
 - (b) Brain
 - (c) Spinal Cord
 - (d) Stomach and Liver
13. Bones are made of :
 - (a) Minerals and salts
 - (b) Acids and bases
 - (c) Living cells and minerals
 - (d) Salt and water
14. Gargling with warm salt water relieves :
 - (a) Fever
 - (b) Indigestion
 - (c) Cough
 - (d) Cold
15. Our blood-cells are produced in the :
 - (a) Bone marrow
 - (b) Heart
 - (c) Intestine
 - (d) Liver
16. The tissues that prevent the leaves rubbing against each other is :
 - (a) Cartilage
 - (b) Ligament
 - (c) Tendon
 - (d) None of these
17. Kidneys help to remove waste in the form of :
 - (a) Sweat
 - (b) Carbon Dioxide
 - (c) Urine
 - (d) All of these

18. The system that controls all our actions :
 - (a) Digestive system
 - (b) Nervous system
 - (c) Muscular system
 - (d) Respiratory system
19. The undigestive food is thrown out of our body through :
 - (a) Stomach
 - (b) Intestine
 - (c) Anus
 - (d) Food Pipe
20. Pick out the correct one :
 - (a) Cell — Organs — tissues — Organ systems — Organism
 - (b) Organs — tissues — cells — organism — Organ Systems
 - (c) Cells — tissues — organs — organ system — organism
 - (d) Cells — organ system — tissues — organism — organ
21. Which of these is not a part of our digestive system ?
 - (a) Mouth
 - (b) Food Pipe
 - (c) Intestine
 - (d) Kidney
22. Water vapour on.....changes into water again.
 - (a) melting
 - (b) freezing
 - (c) cooling
 - (d) heating
23.changes solid wax into liquid wax :
 - (a) cooling
 - (b) heating
 - (c) freezing
 - (d) none of these
24. The measuring cans of a milkman and at petrol pump are :
 - (a) Similar
 - (b) Different
 - (c) Equal
 - (d) None of these
25. Weighing balance is also known as :
 - (a) Stales
 - (b) Scales
 - (c) Scale
 - (d) Sales
26.is a non-luminous object :
 - (a) Mirror
 - (b) Fire ball
 - (c) Star
 - (d) Sun
27. Which of these is an unpleasant sound ?
 - (a) Chirping of birds
 - (b) Thunder
 - (c) Playing a piano
 - (d) Your favourite song
28. Frictional force always.....the speed of an object :
 - (a) Decreases
 - (b) Increases
 - (c) Does not effect
 - (d) Does not decide
29. The mass of an object tells us about :
 - (a) lightness or heaviness of the object
 - (b) length and breadth of the object
 - (c) Shape of the object
 - (d) Size of the object
30. Which of the following will not change its shape when kept in different containers.
 - (a) Milk
 - (b) Oil
 - (c) Nail Polish
 - (d) Chalk

31. States of matter can be changed by :
 - (a) Cooling
 - (b) Heating
 - (c) Both (a) and (b)
 - (d) Pressing
32. Shadows are formed when :
 - (a) Light travels in a straight line
 - (b) Light does not travel
 - (c) Path of the light is blocked
 - (d) There is no light
33. The object which gives light of their own are called :
 - (a) glowing object
 - (b) luminous object
 - (c) non-luminous object
 - (d) transparent object
34. A fielder catches a ball by applying :
 - (a) Friction
 - (b) Force
 - (c) Gravity
 - (d) All of these
35. A friction is caused due to :
 - (a) Roughness of surface
 - (b) Smoothness of surface
 - (c) Clarity of surface
 - (d) Transparency of surface
36. Mechanical force acts :
 - (a) From the distance
 - (b) Directly on an object
 - (c) From the earth
 - (d) Through a medium
37. The weather is neither too hot nor too cold in :
 - (a) Summers
 - (b) Winters
 - (c) Spring
 - (d) Rain
38. Earth takes 365 days to complete one :
 - (a) rotation
 - (b) revolution
 - (c) orbit
 - (d) Both (a) and (b)
39. The revolution of the Earth causes :
 - (a) day and night
 - (b) change of season
 - (c) shadows
 - (d) none of these
40. Moon takes.....days to rotate around its axis.
 - (a) 30
 - (b) 28
 - (c) 27
 - (d) 29
41. The heavenly body that glows with its own light is :
 - (a) Moon
 - (b) Saturn
 - (c) Venus
 - (d) Proxima Centauri
42. The colour of a star depends on its :
 - (a) Surface temperature
 - (b) Distance from sun
 - (c) Distance from earth
 - (d) None of these
43. Interior of the earth is called :
 - (a) Lava
 - (b) Crust
 - (c) Atmosphere
 - (d) Core

44. When northern half of the Earth is tilted towards the Sun, we will have :
 (a) Summer season (b) Winter season
 (c) Spring season (d) Rainy season
45. Which one of these has 19 moons ?
 (a) Mercury (b) Saturn
 (c) Mars (d) Uranus
46. The gas which gives colourful glow when used in electrical lights :
 (a) Oxygen (b) Neon
 (c) Nitrogen (d) Ozone
47. Which plant has nitrogen fixing bacteria in its roots :
 (a) Wheat plant (b) Soyabean plant
 (c) Rice plant (d) All of these
48. This gas in the air protects us from harmful ultra-violet rays of the sun :
 (a) Argon (b) Oxygen
 (c) Ozone (d) Neon
49. Sound is produced by :
 (a) Vibration (b) Reflections
 (c) Repulsion (d) Attraction
50. The action of.....breaks the rocks
 (a) Sun (b) Wind
 (c) Water (d) All of these

ANSWER - KEY

- | | | | | | | |
|-------|-------|-------|-------|-------|-------|-------|
| 1. b | 2. a | 3. c | 4. c | 5. a | 6. a | 7. b |
| 8. c | 9. a | 10. d | 11. b | 12. a | 13. c | 14. c |
| 15. a | 16. a | 17. c | 18. b | 19. c | 20. c | 21. d |
| 22. c | 23. b | 24. a | 25. b | 26. a | 27. b | 28. a |
| 29. a | 30. d | 31. c | 32. c | 33. b | 34. b | 35. a |
| 36. b | 37. c | 38. b | 39. b | 40. d | 41. d | 42. a |
| 43. d | 44. a | 45. b | 46. b | 46. b | 47. b | 48. c |
| 49. a | 50. d | | | | | |
-

SOCIAL STUDIES

SYLLABUS

1. The Universe
2. Globe and Map
3. Our Country - States - Festivals - Food, Clothes, Languages etc.....
4. People of India
5. Our Cultural Diversity
6. Local Bodies
7. Means of Communication
8. Our Environment
9. Knowing Our Past
10. Early Humans

1. The first year after Christ was born would be written as :
(a) 1CE (b) 1BCE
(c) 1EC (d) 1BEC
2. AD term stands for :
(a) And Christ (b) Before Christ
(c) Anno Domini (d) Anti Domini
3. The Scientific name for human beings is :
(a) Homophones (b) Homo Sapiens
(c) Homopolar (d) Homograft
4. Approximately.....per cent of the earth is covered with water.
(a) 65 (b) 70
(c) 90 (d) 85
5. India is the.....largest country in the world.
(a) Second (b) Fifth
(c) Seventh (d) Third
6. The highest peak in the Himalayas :
(a) Mount Everest (b) Mount K2
(c) Kanchanjunga (d) Vindhyas
7. A peninsula is a..... Land surrounded by water on
(a) Four sides (b) Three sides
(c) Two sides (d) One sides
8. The.....separates India from the rest of the continent of Asia :
(a) The Arabian Sea (b) The Indian Ocean
(c) The Himalayas (d) The Bay of Bengal

9. Hand woven cloth is known as :
(a) Silk (b) Khadi
(c) Linen (d) Woollen
10. An angrakha is worn by the people of.....
(a) Tamilnadu (b) Haryana
(c) Rajasthan (d) Punjab
11. The ceremonial head of the nation is.....
(a) The Chief Minister (b) The Prime Minister
(c) The President (d) The Governor
12. The head of the Central Government is.....
(a) The Prime Minister (b) The Chief Minister
(c) The Home Minister (d) The Governor
13. The largest union territory of India is :
(a) Delhi (b) Lakshadweep
(c) Andaman and Nicobar (d) Puducherry
14. The smallest union territory is.....
(a) Chandigarh (b) Lakshadweep
(c) Andaman Nicobar (d) Daman
15. The official language of India is.....
(a) English (b) Hindi
(c) Sanskrit (d) Urdu
16. The smallest State in India :
(a) Sikkim (b) Goa
(c) Mizoram (d) Manipur
17. Kathakali is a form of dance popular in :
(a) Odisha (b) Kerala
(c) Tamil Nadu (d) Andhra Pradesh
18. Kuchipudi is the folk dance of :
(a) Tamilnadu (b) Gujarat
(c) Andhra Pradesh (d) Maharashtra
19. The National Fruit of India is :
(a) Apple (b) Orange
(c) Mango (d) Banana
20. Our National Song 'Vande Mataram' was composed in Bengali and _____
(a) Hindi (b) Punjabi
(c) Sanskrit (d) English
21. Time taken to sing our National Anthem isseconds.
(a) 55 (b) 52
(c) 60 (d) 45

22. Delhi became the capital of India in.....
- (a) 1947 (b) 1950
(c) 1911 (d) 1980
23. City of New Delhi was planned by.....
- (a) Lord Mountbatten (b) Sir. M. Visvesvariah
(c) Edwin Lutyen (d) Lord Irwin
24. The Red Fort in Delhi was built by :
- (a) Babur (b) Akbar
(c) Humayun (d) Shah Jahan
25. The World's Tallest Minaret :
- (a) Qutub Minar (b) Char Minar
(c) Jama Masjid (d) Lotus Temple
26. The Qutub Minar was built by :
- (a) Akbar (b) Shah Jahan
(c) Qutub-ud-din Aibak (d) Jalalludin
27. Srikhand is the famous sweet dish of :
- (a) West Bengal (b) Tamilnadu
(c) Maharastra (d) Andhra Pradesh
28. The most popular games in Kolkata are :
- (a) Cricket and Hockey (b) Badminton and Cricket
(c) Football and Cricket (d) Basket Ball and Cricket
29. The head of the village panchayat is :
- (a) Pradhan (b) Village Officer
(c) Adults (d) Mayor
30. The largest Indian state in geographical terms :
- (a) Madhya Pradesh (b) Uttar Pradesh
(c) Rajasthan (d) Andhra Pradesh
31. The largest planet in the Solar System :
- (a) Mercury (b) Earth
(c) Jupiter (d) Neptune
32. Earth Completes its rotation in.....hours
- (a) 48 (b) 28
(c) 52 (d) 24
33.is called as the Earth's twin :
- (a) Moon (b) Mars
(c) Jupiter (d) Venus
34. The highest mountain Peak in the world is :
- (a) Mount Everest (b) Aravallis
(c) K2 (d) Vindhyas

35. Shakti Sthal is the memorial of.....
 (a) Rajeev Gandhi (b) Indira Gandhi
 (c) Mahatma Gandhi (d) Jawaharlal Nehru
36. The Hindi film industry of India is known as :
 (a) Hollywood (b) Bollywood
 (c) Tollywood (d) Kollywood
37. The state, which is known as 'The Light of the East' :
 (a) Manipur (b) Meghalaya
 (c) Assam (d) Mizoram
38. The designer of the 'Rock Garden' in Chandigarh was :
 (a) Le Corbusier (b) Nek Chand
 (c) Edwin Lytten (d) Lord Minto
39. Financial Capital of India is :
 (a) Delhi (b) Kolkata
 (c) Chennai (d) Mumbai
40. The longest sea bridge in India :
 (a) Bandra-Worli (b) Howrah Bridge
 (c) Krishna Bridge (d) Kharagpur Bridge

ANSWER - KEY

- | | | | | | | |
|-------|-------|-------|-------|-------|-------|-------|
| 1. a | 2. c | 3. b | 4. b | 5. c | 6. a | 7. b |
| 8. c | 9. b | 10. c | 11. c | 12. a | 13. c | 14. b |
| 15. b | 16. b | 17. b | 18. c | 19. c | 20. c | 21. b |
| 22. c | 23. c | 24. d | 25. a | 26. c | 27. c | 28. c |
| 29. a | 30. c | 31. c | 32. d | 33. d | 34. a | 35. b |
| 36. b | 37. c | 38. b | 39. d | 40. a | | |
-

GENERAL KNOWLEDGE

SYLLABUS

1. Plants, Birds, Animals
2. About My Country
3. Our Body
4. Places of worship
5. Sports
6. Solar System
7. Our Pride
8. First in India
9. First in the World
10. Inventors and Inventions
11. Famous Indians in History
12. Rivers of India
13. Facts about India
14. Health and Hygiene

1.years make a decade :
(a) 25 (b) 10
(c) 100 (d) 60
2. 50 Years of an event is known as :
(a) Golden Jubilee (b) Silver Jubilee
(c) Diamond Jubilee (d) Platinum Jubilee
3. A plant that needs support to stand up :
(a) Creeper (b) Climber
(c) Shrub (d) Herb
4. Which is our National River :
(a) Yamuna (b) Ganga
(c) Satluj (d) Brahmaputra
5. National Bird of India is :
(a) Parrot (b) Peacock
(c) Myna (d) Sparrow
6. The founder of Jainism :
(a) Jesus Christ (b) Guru Nanak
(c) Lord Mahavira (d) Gautam Budha
7. Spice Garden of India :
(a) Punjab (b) Mumbai
(c) Kerala (d) Bangalore

8. Which river is known as the sorrow of Bihar :
 (a) Hoogly (b) Kosi
 (c) Brahmaputra (d) Ganga
9. The First Woman IPS officer :
 (a) Bachendri Pal (b) Kiran Bedi
 (c) Pratibha Patel (d) Rajkumari Amrita Kaur
10. The first Indian Woman Nobel prize winner :
 (a) Kiran Bedi (b) Indira Nooyi
 (c) Indira Gandhi (d) Mother Teresa
11. The first woman President of India :
 (a) Sarojini Naidu (b) Pratibha Patil
 (c) Indira Gandhi (d) Vijay Lakshmi Pandit
12. The Iron Man of India :
 (a) Gandhiji (b) Sardar Vallabh Bhai Patel
 (c) Raja Ram Mohan Roy (d) Swami Vivekanand
13. The longest river in India :
 (a) Ganga (b) Yamuna
 (c) Brahmaputra (d) Chambal
14. The largest indoor stadium in India is :
 (a) Talkatora Stadium (b) Jawaharlal Nehru Stadium
 (c) Kolkata Stadium (d) Birla Stadium
15. The largest internal organ in human body :
 (a) Kidney (b) Liver
 (c) Heart (d) Intestine
16. The largest external organ in human body :
 (a) Ears (b) Legs
 (c) Hands (d) Skin
17. Sunlight gives us.....
 (a) Vitamin C (b) Vitamin D
 (c) Vitamin E (d) Vitamin A
18. Which Indian city is known as 'City of Lakes'.
 (a) Jaipur (b) Dimapur
 (c) Kolkata (d) Udaipur
19. The land of White Elephants :
 (a) Japan (b) Scotland
 (c) Thailand (d) Cuba
20. The Land of Rising Sun :
 (a) Japan (b) Norway
 (c) Scotland (d) Egypt

21. The largest living animal :
 (a) Elephant (b) Giraffe
 (c) Blue Whale (d) Camel
22. The animal that is known as beast of burden.....
 (a) Camel (b) Donkey
 (c) Cow (d) Bull
23. The king of flowers :
 (a) Sunflower (b) Rose
 (c) Jasmine (d) Marigold
24. The largest populated metropolitan city in India is :
 (a) New Delhi (b) Mumbai
 (c) Kolkata (d) Chennai
25. A very large mass of water :
 (a) Lake (b) Ocean
 (c) River (d) Sea
26. The Capital of Lakshadweep island group is :
 (a) Daman (b) Puducherry
 (c) Kavaratti (d) Port Blair
27. India's largest salt water lake Chilika is in
 (a) Tamil Nadu (b) Assam
 (c) Odisha (d) Arunachal Pradesh
28. Disney land is a theme park in.....
 (a) U.K. (b) Japan
 (c) California (d) Paris
29. The Missile Man of India is :
 (a) Dr. Satish Dhawan (b) Dr. Radhakrishnan
 (c) Dr. A.P.J. Abdul Kalam (d) Prof. Vikram Sarabai
30. The weather cock shows the.....of the wind :
 (a) Speed (b) Direction
 (c) Force (d) Velocity
31. The world's smallest Mammal is.....
 (a) Whale (b) Rat
 (c) Cat (d) Bat
32. World's fastest aquatic mammal :
 (a) Blue Whale (b) Killer Whale
 (c) Dolphin (d) Shark
33. The inventor of the electric lamp :
 (a) Alexander Graham Bell (b) James Watt
 (c) Thomas Alva Edison (d) J. Gutenberg

34. The inventor of Telephone :
(a) John Logic Baird (b) Alexander Graham Bell
(c) Thomas Alva Edison (d) J. Gutenberg
35. I give telephone numbers. I am a :
(a) Atlas (b) Diary
(c) Dictionary (d) Directory
36. I show your bank statement. I am a.....
(a) Pass Book (b) Cheque Book
(c) ATM Card (d) Diary
37. Ferdinand Magellan belonged to :
(a) Italy (b) Spain
(c) Portugal (d) Norway
38. Neil Armstrong belonged to :
(a) Italy (b) Portugal
(c) USA (d) Scotland
39. Number of players in a Hockey team :
(a) 12 (b) 11
(c) 10 (d) 7
40. Who was the first man to declare that the earth is round :
(a) Galelio (b) Aryabhatta
(c) Ferdinand Magellan (d) Edwin Aldrin
-

ANSWER - KEY

- | | | | | | | | | | | | | | |
|-----|---|-----|---|-----|---|-----|---|-----|---|-----|---|-----|---|
| 1. | b | 2. | a | 3. | b | 4. | b | 5. | b | 6. | c | 7. | c |
| 8. | b | 9. | b | 10. | d | 11. | b | 12. | b | 13. | c | 14. | a |
| 15. | b | 16. | d | 17. | d | 18. | d | 19. | c | 20. | a | 21. | c |
| 22. | b | 23. | b | 24. | b | 25. | b | 26. | c | 27. | c | 28. | c |
| 29. | c | 30. | b | 31. | d | 32. | b | 33. | c | 34. | b | 35. | d |
| 36. | a | 37. | b | 38. | c | 39. | b | 40. | b | | | | |
-

PART - B (SUBJECTIVE TYPE)
PARAGRAPH WRITING

Read the instructions carefully

- * You are required to write a paragraph on any of the given topics
 - * Paragraph should not exceed 75 words
 - * The paragraph should be written in the space provided in the answer book
 - * It is compulsory to attempt both the sections
 - * Part B is considered only when your score in Part A (objective Type) is above 90% .
-

Topics

1. Health education in schools
2. Malaria
3. Healthy mind needs a healthy body
4. Clean surroundings
5. Sports and games important for good health
6. Prevention is better than cure

KNEUS SCHOLASTIC APTITUDE TEST CLASS IV

Model Question Paper

Kindly follow the instructions

- Verify your **Roll Number, School Code** and other details before you start answering
- This question paper contains **60 questions in Part A**. Each question is followed by a series of choices or possible answers. Choose any one option which you feel is correct.
- All questions carry **equal marks**. There is **no negative marking for wrong answers**.
- There is a **Paragraph writing in Part B**. **No evaluation will be made if Part B is unattempted**. Thus Both the sections are to be compulsorily attempted. However part B is considered only when a student secures more than 90% in Part A Objective type
- Try to answer every question. Your test score will be based on the number of questions you answer correctly.
- Please attempt Part B in the space provided in the test booklet or any other specified medium
- **use either blue or black pen for shading the OMR.**
- Please do not mark anything on the OMR sheet other than shading portion to mark your answers
- shade only one answer for each question. Double shading are scored as wrong answers.
- Keep your answer sheets on a hard surface while answering. Do not fold or crease your answer sheet.
- Do not scribble on the answer book.
- **For rough work** use the plain sheet given **at the end of the book**.
- When you finish your test, if time permits, you may re check your work.

Sample Procedure for answering the question

Who is the Prime Minister of India?

A. Dr. Manmohan Singh

B. Mr. Narendra Modi

C. Mr. Akhilesh Yadav

D. Mrs. Sonia Gandhi

E. None of the above

Correct Way

[A] ☒ [B] [C] [D] [E]

Don't do this way

[A] ☒ [B] [C] [D] [E]
[A] ☒ [B] [C] [D] [E]
[A] ☒ [B] [C] [D] [E]

PART - A (OBJECTIVE TYPE) GENERAL STUDIES

Select a suitable collective noun :

1. A.....of people gathered outside the house.
(a) Class (b) Group
(c) Crowd (d) Troop
(e) fleet
2. The..... of sheep grazed in the meadow.
(a) fleet (b) swarm
(c) flock (d) herd
(e) Load

Fill in the blanks with most appropriate noun or form of nouns.

3. My sister had beautiful tiny.....
(a) foot (b) feets
(c) foots (d) feet
(e) legs

Select the correct pronoun :

4. Both Mr and Mrs Singh.have painted the entire house.
(a) herself (b) themselves
(c) ourself (d) themselves
(e) itself

Fill in the blanks using the correct form of the verb :

5. She has.....her work two minutes ago.
(a) Completes (b) Completing
(c) Complete (d) Completed
(e) None of these
6. I.....be late for school.
(a) should (b) must
(c) shall (d) would
(e) None of these

Fill in the blanks with the correct form of the verb in the present tense :

7. The painter.....the house.
(a) paints (b) paint
(c) painted (d) will paint
(e) Painting

Select the correct adjective to complete the sentence.

8. I stay on the.....floor in my building.
(a) up (b) upper
(c) uppermost (d) more up
(e) most up

Select the Adverb of time.

9. He wakes upin the morning.
- | | |
|---------------|---------------|
| (a) fast | (b) sometimes |
| (c) quickly | (d) early |
| (e) every day | |

Fill in the blanks with the appropriate conjunctions.

10. The school assembly will get cancelled.....it rains.
- | | |
|-------------|----------|
| (a) because | (b) when |
| (c) if | (d) or |
| (e) may | |

Fill in the blanks with the correct preposition.

11. The cat is hiding.....the curtain.
- | | |
|------------|-----------|
| (a) on | (b) above |
| (c) behind | (d) down |
| (e) up | |

Select the correct antonym for the word in capital letter.

12. We heard a story of a GIANT.
- | | |
|----------------|-------------|
| (a) angel | (b) monster |
| (c) dwarf | (d) coward |
| (e) snow white | |
13. $5000 + 30 + 8 = \dots\dots\dots$
- | | |
|-------------------|-----------|
| (a) 538 | (b) 5038 |
| (c) 5308 | (d) 50038 |
| (e) None of these | |
14. Which of the following set of numbers are in ascending order :
- | | |
|----------------------------|----------------------------|
| (a) 4736, 1504, 392, 746 | (b) 6982, 6892, 9864, 5321 |
| (c) 7001, 6002, 5003, 4004 | (d) 8041, 8104, 8140, 8410 |
| (e) None of these | |
15. Nidhi likes the number of the type 345, 678, 456,
Which of the following number does she likes ?
- | | |
|-------------------|---------|
| (a) 123 | (b) 358 |
| (c) 777 | (d) 147 |
| (e) None of these | |
16. In which number sentence does 5 makes the equation true ?
- | | |
|----------------------------|----------------------------|
| (a) $70 \div \square = 14$ | (b) $25 \div \square = 1$ |
| (c) $40 \div \square = 10$ | (d) $80 \div \square = 40$ |
| (e) None of these | |

17. Which digit is at the hundred's place in the sum of $2890 + 785$?
(a) 2 (b) 6
(c) 7 (d) 5
(e) None of these
18. If $\frac{1}{5}$ th part is equal to 4, then $\frac{3}{5}$ th part is equal to.....
(a) 5 (b) 6
(c) 9 (d) 12
(e) None of these
19. The equivalent fraction of $\frac{5}{7}$ having numerator 20 is :
(a) $\frac{220}{7}$ (b) $\frac{20}{14}$
(c) $\frac{20}{21}$ (d) $\frac{20}{28}$
(e) None of these
20. Which Indian Currency note does not exist ?
(a) Rs. 5 (b) Rs. 10
(c) Rs. 20 (d) Rs. 25
(e) None of these
21. Seema saved Rs. 90 in 6 days. She saves the same amount everyday. Everyday she saved Rs.
(a) 15 (b) 64
(c) 96 (d) 540
(e) None of these
22. When the time is a quarter past the hour the minute hand is always on :
(a) 3 (b) 9
(c) 6 (d) 12
(e) None of these
23. Convert 270 minutes into hours and minutes :
(a) 4 hours 30 minutes (b) 4 hours 20 minutes
(c) 2 hours 70 minutes (d) 4 hours 40 minutes
(e) None of these
24. What is total number of books in the library ?
(a) 1350 (b) 1400
(c) 1450 (d) 1500
(e) None of these
25. Animals that give birth to young ones and feed them with their milk are called :
(a) Birds (b) Mammals
(c) Reptiles (d) Insects
(e) None of these

26. In a potato plant extra food is stored in :
- (a) leaves (b) Root
(c) Underground stem (d) Branches
(e) All of these
27. Which of the following features does not help a bird to fly ?
- (a) Boat shaped body (b) hollow and light bird
(c) Strong beak (d) Wings
(e) None of these
28. Rele-cage protects the :
- (a) Lungs and Heart (b) Brain
(c) Spinal Cord (d) Stomach and Liver
(e) Lever
29. The tissues that prevent the leaves rubbing against each other is :
- (a) Cartilage (b) Ligament
(c) Tendon (d) None of these
(e) All of these
30. Pick out the correct one :
- (a) Cell — Organs — tissues — Organ systems — Organism
(b) Organs —tissues — cells — organism — Organ Systems
(c) Cells — tissues — organs — organ system — organism
(d) Cells — organ system — tissues — organism — organ
(e) Organ system — tissues Cells — organism — organ
31. The measuring cans of a milkman and at petrol pump are :
- (a) Similar (b) Different
(c) Equal (d) Depends on the can
(e) All of these
32. Frictional force always.....the speed of an object :
- (a) Decreases (b) Increases
(c) Does not affect (d) Does not decide
(e) Cant determine
33. Shadows are formed when :
- (a) Light travels in a straight line (b) Light does not travel
(c) Path of the light is blocked (d) There is no light
(e) All of these
34. Mechanical force acts :
- (a) From the distance (b) Directly on an object
(c) From the earth (d) Through a medium
(e) None of these

35. Moon takes.....days to rotate around its axis.
- (a) 30 (b) 28
(c) 27 (d) 29
(e) 50
36. When northern half of the earth is tilted towards the Sun, we will have :
- (a) Summer season (b) Winter season
(c) Spring season (d) Rainy season
(e) All of these
37. The first year after Christ was born would be written as :
- (a) 1CE (b) 1BCE
(c) 1EC (d) 1BEC
(e) B1CE
38. Approximately.....per cent of the earth is covered with water.
- (a) 65 (b) 70
(c) 90 (d) 85
(e) 75
39. The.....separate India from the rest of the continent of Asia :
- (a) The Arabian Sea (b) The Indian Ocean
(c) The Himalayas (d) The Bay of Bengal
(e) All of these
40. The head of the nation is.....
- (a) The Chief Minister (b) The Prime Minister
(c) The President (d) The Governor
(e) The Chief Justice
41. The smallest State in India :
- (a) Sikkim (b) Goa
(c) Mizoram (d) Manipur
(e) Uttar Pradesh
42. Our National Song 'Vande Mataram' was composed in :
- (a) Hindi (b) Bangla
(c) Sanskrit (d) English
(e) Pali
43. City of New Delhi was planned by.....
- (a) Lord Mountbatten (b) Sir. M. Visvesvariah
(c) Edwin Lutyen (d) Lord Irwin
(e) Lord Dalhousie
44. The Red Fort in Delhi was built by :
- (a) Babur (b) Akbar
(c) Humayun (d) Shah Jahan
(e) Jahangir

45. The most popular games in Kolkata are :
 (a) Cricket and Hockey (b) Badminton and Cricket
 (c) Football and Cricket (d) Basket Ball and Cricket
 (e) All of these
46. Earth Completes its rotation in.....
 (a) 48 hours (b) 28 hours
 (c) 52 hours (d) 24 hours
 (e) 36 hours
47. The Hindi film industry of India is known as :
 (a) Hollywood (b) Bollywood
 (c) Tollywood (d) Kollywood
 (e) Coastalwood
48. The designer of the 'Rock Garden' in Chandigarh was :
 (a) Le Corbusier (b) Nek Chand
 (c) Edwin Lytten (d) Lord Minto
 (e) Lord Mayo
49.years make a decade :
 (a) 25 (b) 10
 (c) 100 (d) 60
 (e) 150
50. Which is our National River :
 (a) Yamuna (b) Ganga
 (c) Satluj (d) Brahmaputra
 (e) Narmada
51. Which river is known as sorrow of Bihar :
 (a) Hoogly (b) Kosi
 (c) Brahmaputra (d) Ganga
 (e) Ajay
52. The Iron Man of India :
 (a) Gandhiji (b) Sardar Vallabh Bhai Patel
 (c) Raja Ram Mohan Roy (d) Swami Vivekanand
 (e) V.P. Menon
53. The largest external organ in human body :
 (a) Ears (b) Legs
 (c) Hands (d) Skin
 (e) None of these
54. The Land of Rising Sun :
 (a) Japan (b) Norway
 (c) Scotland (d) Egypt
 (e) Finland

55. The largest populated metropolitan city in India is :
(a) New Delhi (b) Mumbai
(c) Kolkata (d) Chennai
(e) Bengaluru
56. Disney land is a theme park in.....
(a) London (b) Japan
(c) California (d) Paris
(e) Moscow
57. World's fastest aquatic mammal :
(a) Blue Whale (b) Killer Whale
(c) Dolphin (d) Shark
(e) Tortoise
58. I give telephone numbers. I am a :
(a) Atlas (b) Diary
(c) Dictionary (d) Directory
(e) None of these
59. Ferdinand Magellan belonged to :
(a) Italy (b) Spain
(c) Portugal (d) Norway
(e) London
60. Who was the first man to declare that the earth is round :
(a) Galelio (b) Aryabhatta
(c) Ferdinand Magellan (d) Edwin Aldrin
(e) None of these

Paragraph writing

It is **compulsory** to attempt **Part B**

1. Health education in schools
2. Healthy mind needs a healthy body
3. Malaria

[illegible]

Please use this space for rough work

Rough Work

